

Training Header Sheet with Change Log Form

Kentucky Math
Operational

Grade 5/Math
3 Times the Sum of 5 and 8
MA0520109

Practice Sets

Date	Comments	Version
2.2022	Initial Operational Training Set	Set A

Part A

Create a model that can be used to represent the value of 3 times the sum of 5 and 8.

Drag and drop the appropriate number of groupings into the box to create your model. Each grouping may be used once, more than once, or not at all.

Part B

Write an expression that can be used to represent “3 times the sum of 5 and 8.” Explain how your expression compares to the model you created in Part A.


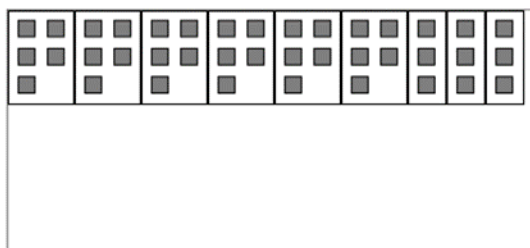
Enter your expression and your explanation in the space provided.

$3 \times (5 + 8) = 39$
 there are 39 blocks in our model

Part A

Create a model that can be used to represent the value of 3 times the sum of 5 and 8.

Drag and drop the appropriate number of groupings into the box to create your model. Each grouping may be used once, more than once, or not at all.

**3 Times the Sum of 5 and 8****Part B**

Write an expression that can be used to represent "3 times the sum of 5 and 8." Explain how your expression compares to the model you created in Part A.

Enter your expression and your explanation in the space provided.

$$(5 + 8) \times 3$$

First I added the sum of 5 and 8 and got the sum of 13. Then I took the sum of 5 and 8 which got the sum of 13 and multiplied it by 3 and got the product of 39.

Part A

Create a model that can be used to represent the value of 3 times the sum of 5 and 8.

Drag and drop the appropriate number of groupings into the box to create your model. Each grouping may be used once, more than once, or not at all.

3 Times the Sum of 5 and 8

Part B

Write an expression that can be used to represent "3 times the sum of 5 and 8." Explain how your expression compares to the model you created in Part A.

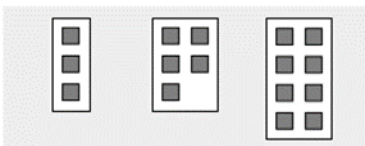
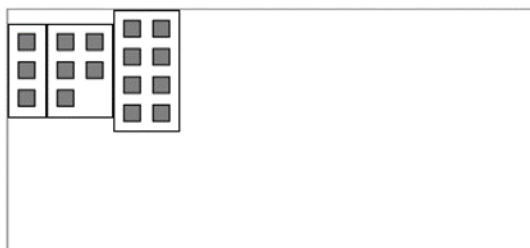
Enter your expression and your explanation in the space provided.

$$5 \times 8 = 40 \times 3 = 120$$

Part A

Create a model that can be used to represent the value of 3 times the sum of 5 and 8.

Drag and drop the appropriate number of groupings into the box to create your model. Each grouping may be used once, more than once, or not at all.

**3 Times the Sum of 5 and 8****Part B**

Write an expression that can be used to represent "3 times the sum of 5 and 8." Explain how your expression compares to the model you created in Part A.

Enter your expression and your explanation in the space provided.

$$3 \times (5 + 8)$$

Part A

Create a model that can be used to represent the value of 3 times the sum of 5 and 8.

Drag and drop the appropriate number of groupings into the box to create your model. Each grouping may be used once, more than once, or not at all.

3 Times the Sum of 5 and 8

Part B

Write an expression that can be used to represent "3 times the sum of 5 and 8." Explain how your expression compares to the model you created in Part A.

Enter your expression and your explanation in the space provided.

$$(3x) + (5&8)$$

Part A

Create a model that can be used to represent the value of 3 times the sum of 5 and 8.

Drag and drop the appropriate number of groupings into the box to create your model. Each grouping may be used once, more than once, or not at all.

Part B

Write an expression that can be used to represent "3 times the sum of 5 and 8." Explain how your expression compares to the model you created in Part A.

Enter your expression and your explanation in the space provided.

In the model above i added three eights and three fives to equal thirty-nine which is the sum of five plus eight three times

Part A

Create a model that can be used to represent the value of 3 times the sum of 5 and 8.

Drag and drop the appropriate number of groupings into the box to create your model. Each grouping may be used once, more than once, or not at all.

Part B

Write an expression that can be used to represent "3 times the sum of 5 and 8." Explain how your expression compares to the model you created in Part A.

Enter your expression and your explanation in the space provided.

$$(8) + 5 = 13) \times 3 = 39$$

The equation above gives a sum of 39 because eight plus five equals 13, then the equation multiplies the sum of thirteen by 3 making your answer 39.

On the model there is a series of repeated addition so since five plus eight equals 13 the addends were written three times to show that $8 + 5$ written 3 times equals 39.

Part A

Create a model that can be used to represent the value of 3 times the sum of 5 and 8.

Drag and drop the appropriate number of groupings into the box to create your model. Each grouping may be used once, more than once, or not at all.

3 Times the Sum of 5 and 8

Part B

Write an expression that can be used to represent "3 times the sum of 5 and 8." Explain how your expression compares to the model you created in Part A.

Enter your expression and your explanation in the space provided.

$$5 + 8 = 13$$

$$13 \times 3 = 39$$

Thus, the answer is thirty-nine

Part A

Create a model that can be used to represent the value of 3 times the sum of 5 and 8.

Drag and drop the appropriate number of groupings into the box to create your model. Each grouping may be used once, more than once, or not at all.

3 Times the Sum of 5 and 8

Part B

Write an expression that can be used to represent "3 times the sum of 5 and 8." Explain how your expression compares to the model you created in Part A.

Enter your expression and your explanation in the space provided.

3×13 . $8 + 5 = 13$. I have 3 groups of five and 3 groups of eight (3×13)

Part A

Create a model that can be used to represent the value of 3 times the sum of 5 and 8.

Drag and drop the appropriate number of groupings into the box to create your model. Each grouping may be used once, more than once, or not at all.

3 Times the Sum of 5 and 8

Part B

Write an expression that can be used to represent "3 times the sum of 5 and 8." Explain how your expression compares to the model you created in Part A.

Enter your expression and your explanation in the space provided.

$$(5 + 8) + (5 + 8) + (5 + 8)$$

Because they both show 5 and 8 being added 3 times

Part A

Create a model that can be used to represent the value of 3 times the sum of 5 and 8.

Drag and drop the appropriate number of groupings into the box to create your model. Each grouping may be used once, more than once, or not at all.

3 Times the Sum of 5 and 8

Part B

Write an expression that can be used to represent "3 times the sum of 5 and 8." Explain how your expression compares to the model you created in Part A.

Enter your expression and your explanation in the space provided.

the sum of 8 and 5 multiplied by 3

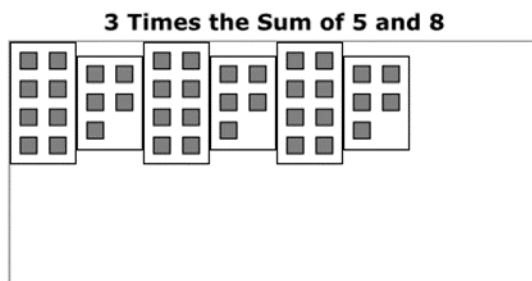
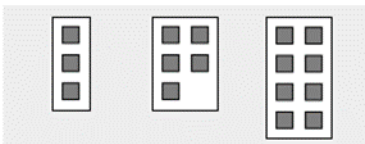
|

$$(8 + 5) 3 \times \square$$

Part A

Create a model that can be used to represent the value of 3 times the sum of 5 and 8.

Drag and drop the appropriate number of groupings into the box to create your model. Each grouping may be used once, more than once, or not at all.

**Part B**

Write an expression that can be used to represent "3 times the sum of 5 and 8." Explain how your expression compares to the model you created in Part A.

Enter your expression and your explanation in the space provided.

$(5 + 8) \times 3 = 39$. It compares with the model because there were three of the eight squares and three of the five squares. When you add them up you will still get thirty-nine.

Part A

Create a model that can be used to represent the value of 3 times the sum of 5 and 8.

Drag and drop the appropriate number of groupings into the box to create your model. Each grouping may be used once, more than once, or not at all.

Part B

Write an expression that can be used to represent "3 times the sum of 5 and 8." Explain how your expression compares to the model you created in Part A.

Enter your expression and your explanation in the space provided.

$3 \times 5 + 8$. The expression compares to the model I made in part A because it said $3 \times$ the sum of 5 and 8 so I put 5 squares inside the rectangle along with 8 squares put two more sets of 5 and 8 to represent the $3 \times 5 + 8$ and since $5 + 8$ equals 13 I did $13 \times 3 = 39$. So the answer is 39. (P.S i wasn't sure how to do it.)

Part A

Create a model that can be used to represent the value of 3 times the sum of 5 and 8.

Drag and drop the appropriate number of groupings into the box to create your model. Each grouping may be used once, more than once, or not at all.

3 Times the Sum of 5 and 8

Part B

Write an expression that can be used to represent "3 times the sum of 5 and 8." Explain how your expression compares to the model you created in Part A.

Enter your expression and your explanation in the space provided.

$$(3 \times 5) + (3 \times 8) = 39$$

Part A

Create a model that can be used to represent the value of 3 times the sum of 5 and 8.

Drag and drop the appropriate number of groupings into the box to create your model. Each grouping may be used once, more than once, or not at all.

Part B

Write an expression that can be used to represent "3 times the sum of 5 and 8." Explain how your expression compares to the model you created in Part A.

Enter your expression and your explanation in the space provided.

$$8 + 5 + 5 + 8 + 8 + 5 = 39 \text{ wich is also equialent to } (8 + 5) \times 3$$

$$8 + 5 = 13 \text{ and } 13 \times 3 \text{ is } 39 \text{ so } 8 \times 3 = 24$$

$$\text{and } 5 \times 3 = 15$$

$$39$$

Part A

Create a model that can be used to represent the value of 3 times the sum of 5 and 8.

Drag and drop the appropriate number of groupings into the box to create your model. Each grouping may be used once, more than once, or not at all.

Part B

Write an expression that can be used to represent "3 times the sum of 5 and 8." Explain how your expression compares to the model you created in Part A.

Enter your expression and your explanation in the space provided.

$$3 \times 13 = 13 \times 3$$

$$13 \times 3 = 13 + 13 + 13 = 39$$

$$13 \times 3 = 39$$

$$5 + 8 = 13$$

well i know if you do a model wich shows 3 times the sum of 8 plus 5 well i knew 5 plus 8 is 13 so then i did 3 times 13 then i turned it to 13 times 3 wich then i did a model again wich is 13 dots in a circle 3 times wich gave me 39 wich then i knew that was my answer.

Part A

Create a model that can be used to represent the value of 3 times the sum of 5 and 8.

Drag and drop the appropriate number of groupings into the box to create your model. Each grouping may be used once, more than once, or not at all.

3 Times the Sum of 5 and 8

Part B

Write an expression that can be used to represent "3 times the sum of 5 and 8." Explain how your expression compares to the model you created in Part A.

Enter your expression and your explanation in the space provided.

$$3 \times 5 \times 8 = 16$$

Because 3×5 is 8 and we \times *another* 8 and that will equal to 16.

Part A

Create a model that can be used to represent the value of 3 times the sum of 5 and 8.

Drag and drop the appropriate number of groupings into the box to create your model. Each grouping may be used once, more than once, or not at all.

3 Times the Sum of 5 and 8

Part B

Write an expression that can be used to represent "3 times the sum of 5 and 8." Explain how your expression compares to the model you created in Part A.

Enter your expression and your explanation in the space provided.

$$5 + 8 \times 3 = 39$$

so I first added up the 5 plus 8 and then multiplied it by 3

Part A

Create a model that can be used to represent the value of 3 times the sum of 5 and 8.

Drag and drop the appropriate number of groupings into the box to create your model. Each grouping may be used once, more than once, or not at all.

Part B

Write an expression that can be used to represent "3 times the sum of 5 and 8." Explain how your expression compares to the model you created in Part A.

Enter your expression and your explanation in the space provided.

I did $5 + 8 = 13$ then I did 13×3 which gave me 39. so in the model i did 5×6 or 10×3 . Then i did 3×3 . $10 \times 3 = 30$ and $3 \times 3 = 9$ and *I* added them up and got 39.

Part A

Create a model that can be used to represent the value of 3 times the sum of 5 and 8.

Drag and drop the appropriate number of groupings into the box to create your model. Each grouping may be used once, more than once, or not at all.

3 Times the Sum of 5 and 8

Part B

Write an expression that can be used to represent "3 times the sum of 5 and 8." Explain how your expression compares to the model you created in Part A.

Enter your expression and your explanation in the space provided.

$$3 \times (5 + 8)$$

the answer would be 39